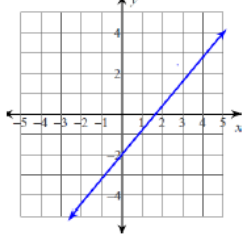
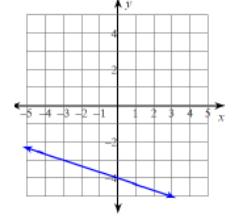


Write an equation of a line in slope-intercept form



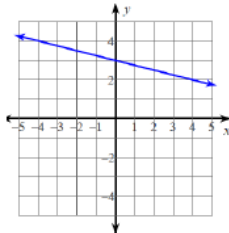
9

Write an equation of a line in slope-intercept form



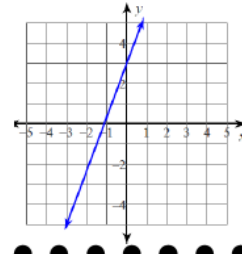
10

Write an equation of a line in slope-intercept form



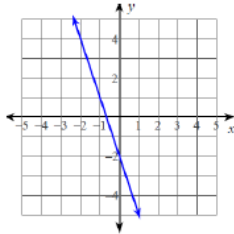
11

Write an equation of a line in slope-intercept form



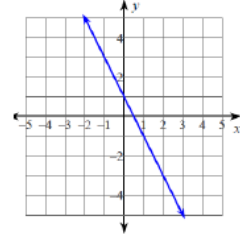
12

Write an equation of a line in slope-intercept form



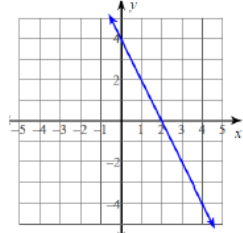
13

Write an equation of a line in slope-intercept form



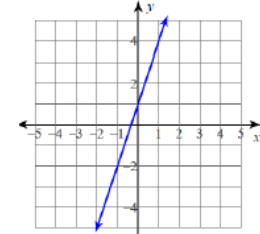
14

Write an equation of a line in slope-intercept form



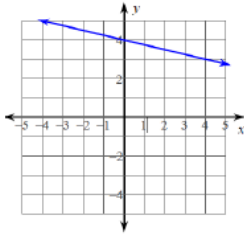
15

Write an equation of a line in slope-intercept form



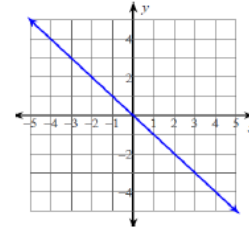
16

Write an equation of a line in slope-intercept form



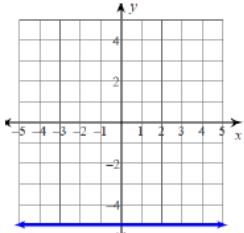
1

Write an equation of a line in slope-intercept form



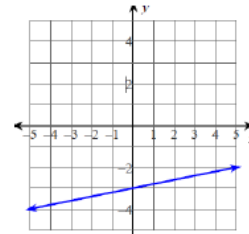
2

Write an equation of a line in slope-intercept form



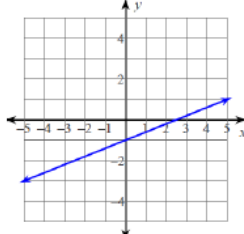
3

Write an equation of a line in slope-intercept form



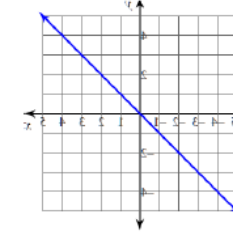
4

Write an equation of a line in slope-intercept form



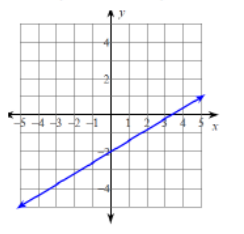
5

Write an equation of a line in slope-intercept form



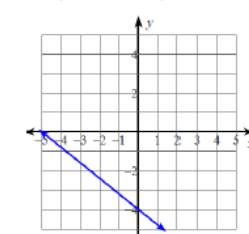
6

Write an equation of a line in slope-intercept form



7

Write an equation of a line in slope-intercept form



8