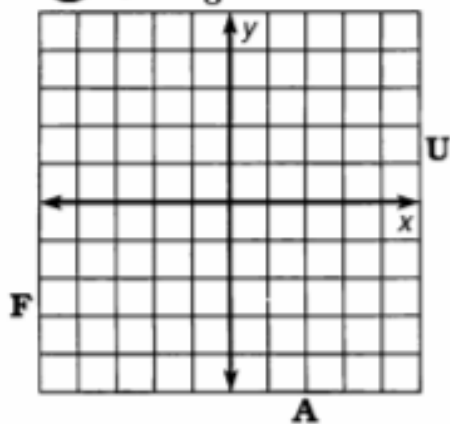


What Happened to the Little Boy Who Swallowed a Silver Dollar?

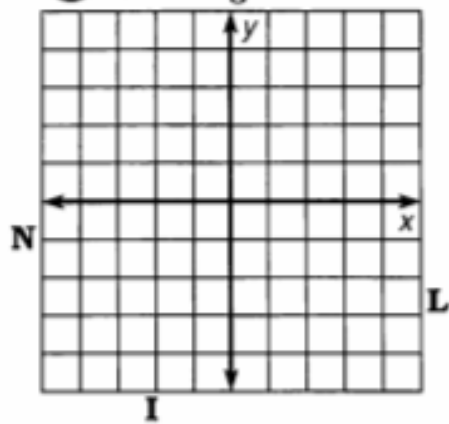
Use the slope and y-intercept to graph each equation. The graph, if extended, will cross a letter outside the grid. Look for this letter in the string of letters at the bottom of the page and cross it out each time it appears. When you finish, write the remaining letters in the rectangle at the bottom of the page.



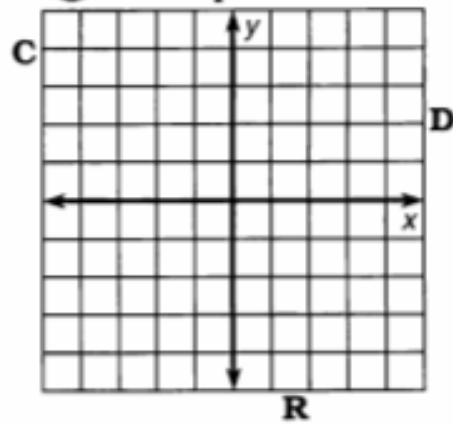
1 $y = \frac{2}{3}x + 1$



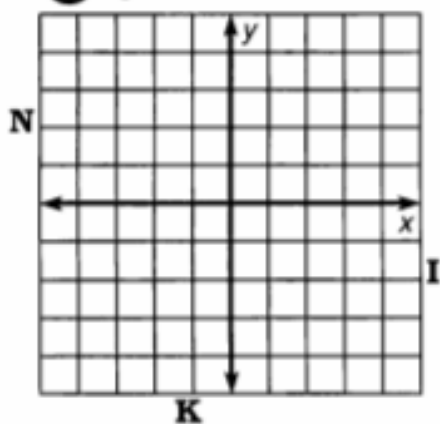
2 $y = -\frac{2}{3}x + 1$



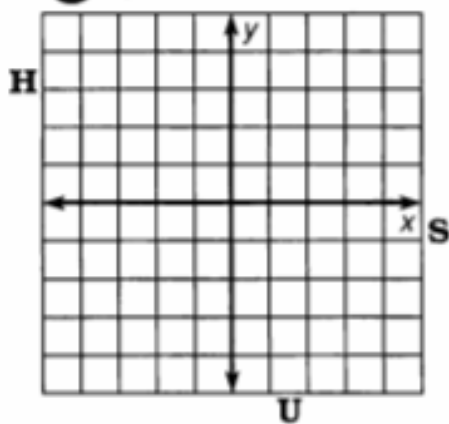
3 $y = \frac{3}{4}x - 2$



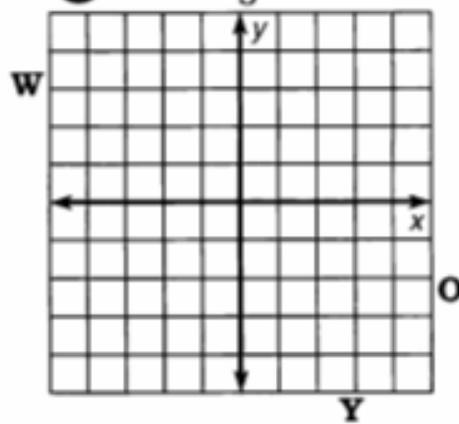
4 $y = 2x - 3$



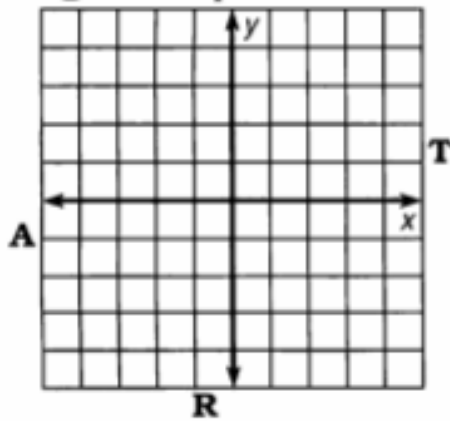
5 $y = -3x - 1$



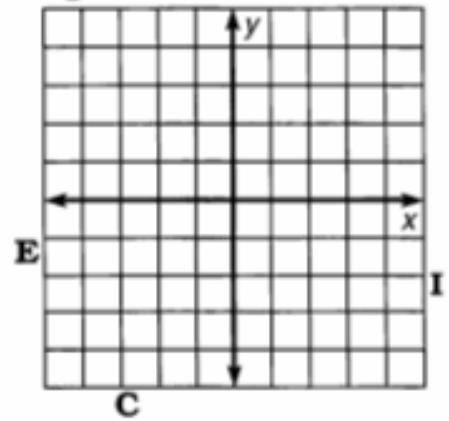
6 $y = -\frac{1}{5}x + 2$



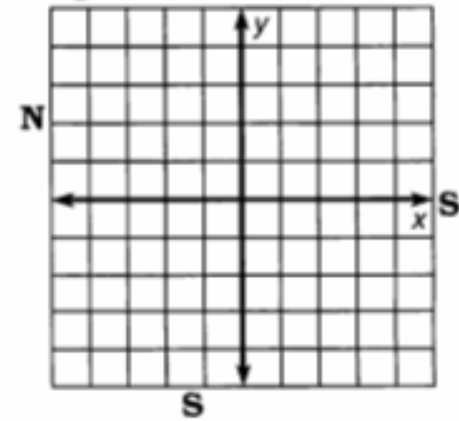
7 $y = \frac{7}{4}x - 4$



8 $y = -x + 3$



9 $y = 4x$



R I N D S O C K W H I F R A N U L I G E Y W E D S T

answer to puzzle: